






# Thursday 1<sup>st</sup> April 2021

Today is April Fool's Day – maybe play a little trick on someone you know! 😊

Use the tracing paper to practise tracing your alphabet using letter join.



Kelly the koala	Emily the elephant	Albert the armadillo	Sadie the squirrel	The monkeys
				
To be curious	To concentrate	To be resilient	To co-operate	To self improve/ continuously improve
<ul style="list-style-type: none"><li>• asks questions</li><li>• notices things</li><li>• looks for patterns and connections</li><li>• thinks of possible reasons</li><li>• researches</li><li>• ponders – what if...?</li><li>• is creative</li></ul>	<ul style="list-style-type: none"><li>• manages distractions</li><li>• gets lost in their learning</li><li>• breaks things down into smaller steps</li><li>• focuses on one thing at a time</li><li>• looks for patterns and connections</li><li>• plans and thinks things through</li><li>• jots things down to help them think</li></ul>	<ul style="list-style-type: none"><li>• uses a growth mindset</li><li>• does not worry if it goes wrong</li><li>• learns from their mistakes</li><li>• is excited to try new things</li></ul>	<ul style="list-style-type: none"><li>• listens to others</li><li>• explains things to help others</li><li>• is kind when you disagree</li><li>• is tolerant</li><li>• works together</li></ul>	<ul style="list-style-type: none"><li>• keeps reviewing their learning</li><li>• improves one thing first</li><li>• tries to be better than last time</li><li>• takes small steps</li><li>• does not compare themselves to anybody else</li></ul>

<https://www.youtube.com/watch?v=0LjzvbTw8>

E4

Thursday 1<sup>st</sup> April 2021

Buddy Reading and Common  
Exception word practice.

*If it is your reading day, have you reading  
record ready too.*

# Mental Maths

1.4.2021

$3 \times 2 =$

$4 \times 5 =$

$2 \times 10 =$

$7 \times 2 =$

$8 \times 10 =$


$6 \times 5 =$

$9 \times 5 =$

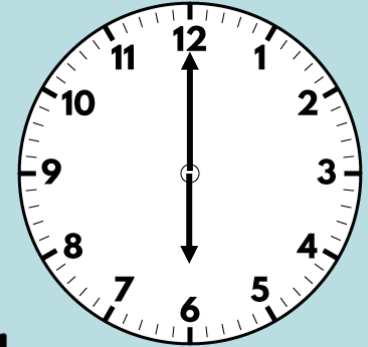
$6 \times 3 =$

$9 \times 3 =$

1) Does the shape show equal parts?



2) How many edges does the shape have?



3) How many people like apple most?

Apple	● ●
Banana	● ● ● ●
Pear	● ● ●

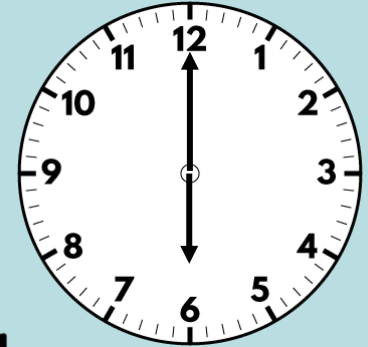
● = 2 people

4) What is 10 more than 63?

1) Does the shape show equal parts?



No



2) How many edges does the shape have?



9

3) How many people like apple most?

Apple	● ●
Banana	● ● ● ●
Pear	● ● ●

● = 2 people

4 people

4) What is 10 more than 63? 73

# Spelling Test

Thursday 1<sup>st</sup> April 2021

Spelling Test

Write out your incorrect words three times in a colourful pens. 😊

# Easter

1.4.2021

Today we are going on an egg hunt.

If you are at home you can create your own egg hunt. I have attached everything you need (except the chocolate – sorry!)

Before we go on our egg hunt, we need to make some Easter head wear.

If at home, see the attached Easter headband.

# Easter

1.4.2021

Attached below today's power point are some more Easter crafts/colouring pages.

Do as many or as few as you like. 😊



Lunchtime 😊



Thursday 1<sup>st</sup> April 2021

Lets finish our day with the Easter story.

<https://www.bbc.co.uk/teach/class-clips-video/religious-studies-ks1-the-christian-story-of-easter/zhgv47h>

Happy Easter Everyone 😊

